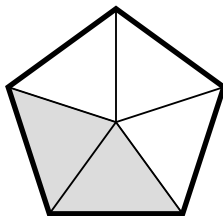
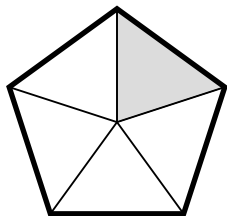


# Comparing Fractions

Name: \_\_\_\_\_ Date: \_\_\_\_\_

Write the fractions for each pair of shapes. Write ">" in the circle if the one on the left is larger, and write "<" if the one on the right is larger.

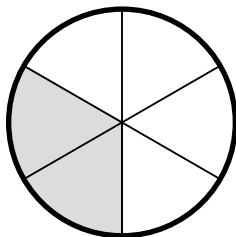
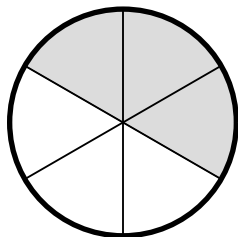
(1)



—

—



(2)



—

—

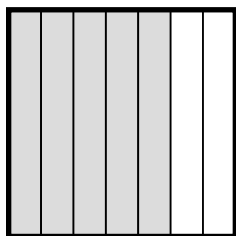

(3)



—

—

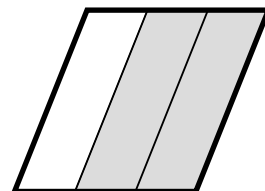
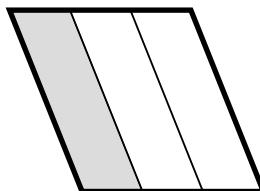
(4)



—

—

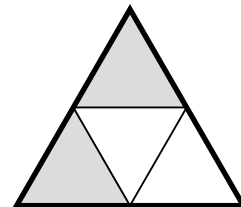
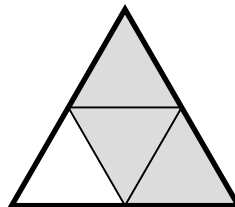
(5)



—

—

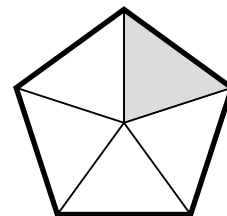
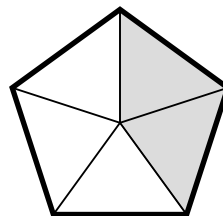
(6)



—

—

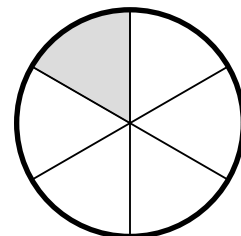
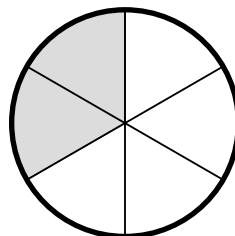
(7)



—

—

(8)



—

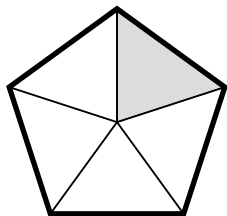
—

# Comparing Fractions

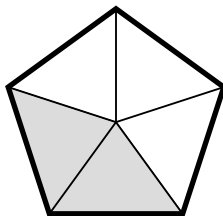
## ANSWER KEY

Write the fractions for each pair of shapes. Write ">" in the circle if the one on the left is larger, and write "<" if the one on the right is larger.

(1)

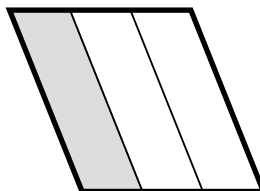


$$\frac{1}{5}$$

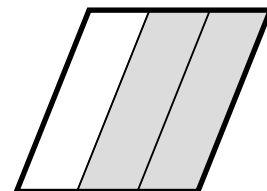


$$\frac{2}{5}$$

(5)

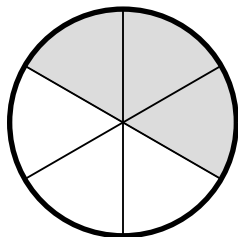


$$\frac{1}{3}$$

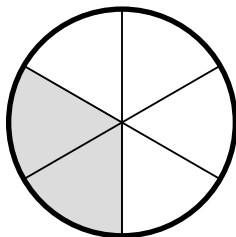


$$\frac{2}{3}$$

(2)

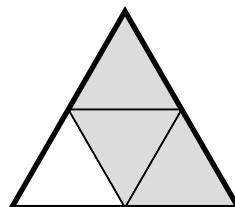


$$\frac{3}{6}$$

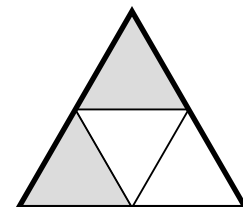


$$\frac{2}{6}$$

(6)




$$\frac{3}{4}$$




$$\frac{2}{4}$$

(3)

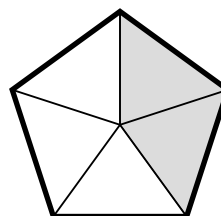


$$\frac{5}{8}$$

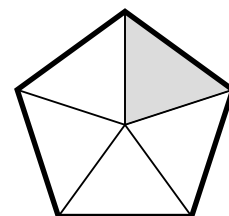


$$\frac{1}{8}$$

(7)




$$\frac{2}{5}$$

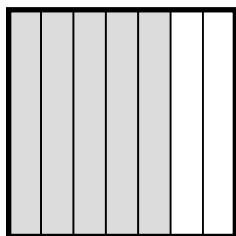


$$\frac{1}{5}$$

(4)

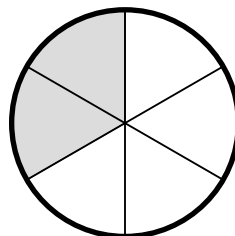


$$\frac{4}{7}$$

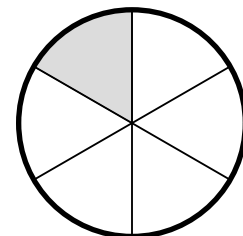


$$\frac{5}{7}$$

(8)



$$\frac{2}{6}$$



$$\frac{1}{6}$$